
















# MINUTE 2


NAME \_\_\_\_\_

Use the pictograph to complete questions 1–3.

1. How many books did Eva read? \_\_\_\_\_ books
2. How many more books did Eva read than Diana? \_\_\_\_\_ books

Eva					
Tyler					
Diana					
Cameron					

(Each  equals 5 books.)

3. Two students read the minimum number of books.  
How many books did they each read? \_\_\_\_\_ books
4.  $77 \div 7 =$  \_\_\_\_\_
5. How many sides does a pentagon have? \_\_\_\_\_ sides
6. Write the missing family fact.  
 $6 + 8 = 14$   
 $14 - 8 = 6$   
 $14 - 6 = 8$   
\_\_\_\_\_
7. The value of the underlined digit in 326,619 is 3 hundred thousand.  
Circle: True or False
8. Write a fraction for the shaded part. \_\_\_\_\_ 
9. 1 minute = \_\_\_\_\_ seconds
10. 0, 3, 6, 9, \_\_\_\_\_, \_\_\_\_\_, \_\_\_\_\_